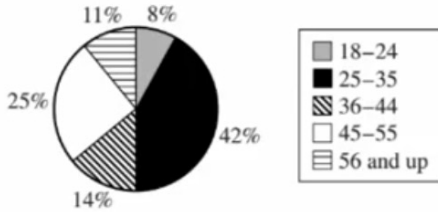
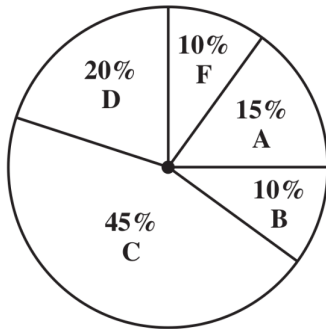


43. The circle graph below shows the distribution of registered voters, by age, for a community. Registered voters are randomly selected from this distribution to be called for jury duty. What are the odds (in the age range: not in the age range) that the first person called for jury duty is in the age range of 25–35 years?

Distribution of Registered Voters by Age



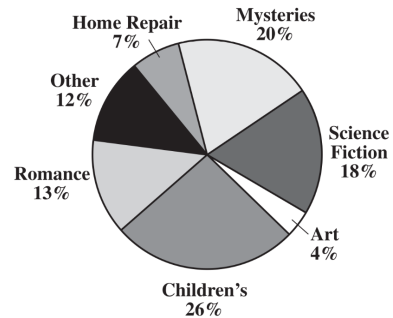
- A. 1:3
 B. 7:8
 C. 7:43
 D. 21:29
 E. 42:25



59. The circle graph shown above represents the distribution of the grades of 40 students in a certain geometry class. How many students received As or Bs?

- A. 6
 B. 10
 C. 15
 D. 20

42. The Smithburg town library wanted to see what types of books were borrowed most often.



According to the circle graph shown above—

- A. more Children's books were borrowed than Romance and Science Fiction combined.
 B. more than half of the books borrowed were Children's, Mysteries, and Art combined.
 C. more Mysteries were borrowed than Art and Science Fiction combined.
 D. more than half of the books borrowed were Romance, Mysteries, and Science Fiction combined.

62. The students at a high school were asked to name their favorite type of art. The table below shows the results of the survey.

Art Survey	
Type of Art	Number of Students
Painting	714
Drawing	709
Sculpture	296
Other	305

Which circle graph BEST shows these data?

