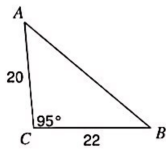
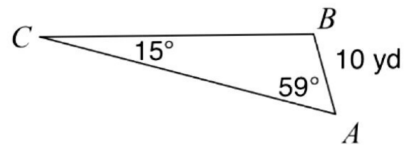


Do Now

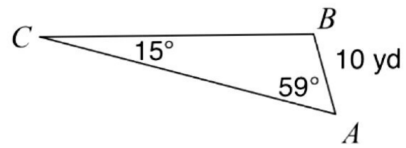
Find c .



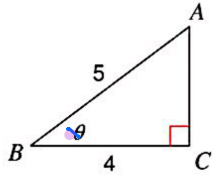
2) Find b .



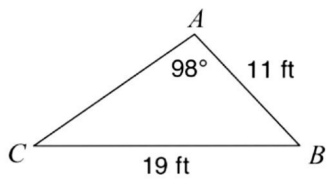
2) Find b .



6)



6) Find $m\angle C$



7) Find $m\angle A$

