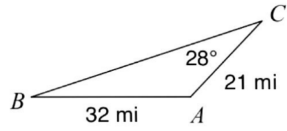


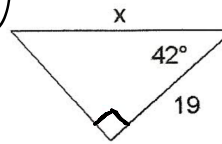
Do Now

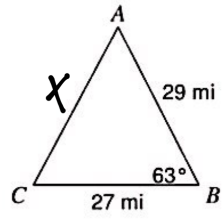
①

Find $m\angle B$

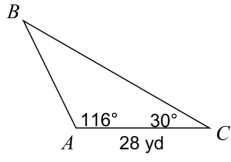


②

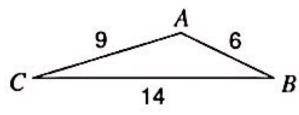


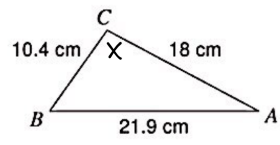


3) Find a



7) Find $m\angle A$





9) Find $m\angle A$

