

Test 6 tomorrow

Laws of Sines and Cosines

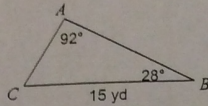
Extra Practice

Sine Law and Cosine Law

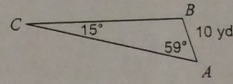
© 2011 Kuta Software LLC. All rights reserved.

Find each measurement indicated. Round your ~~answers~~ ^{sides} to the nearest tenth. Angles = nearest ^{MINUTE}

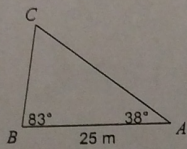
1) Find ~~a~~ ^b



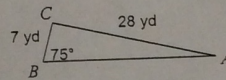
2) Find ~~a~~ ^b



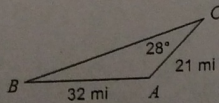
3) Find ~~a~~ ^a



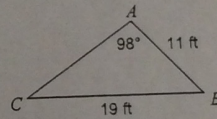
4) Find $m\angle A$



5) Find $m\angle B$

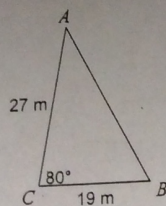


6) Find $m\angle C$

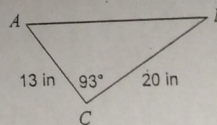


Find each measurement indicated. Round your answers to the nearest tenth.

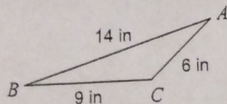
10) Find ~~a~~ ^c



11) Find ~~a~~ ^C



14) Find $m\angle C$



15) Find $m\angle A$

