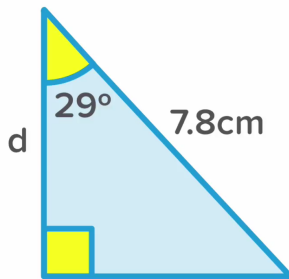
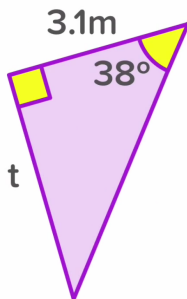
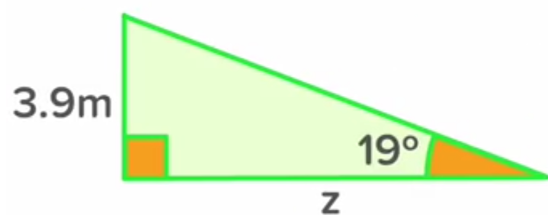

Find side d



Calculate the length of side t.
Give your answer to 1 decimal place.



Find z (to 1 d.p.)



SOH CAH TOA

© 2011 Kuta Software LLC. All rights reserved.

Date _____

Find the value of each trigonometric ratio to the nearest ten-thousandth.

1) $\sin 16^\circ$

2) $\cos 54^\circ$

3) $\tan 88^\circ$

Find the missing side. Round to the nearest tenth.

