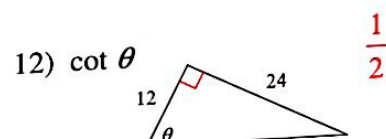

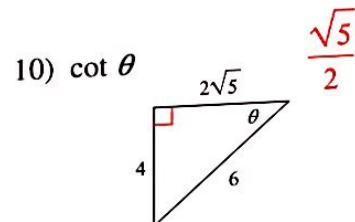
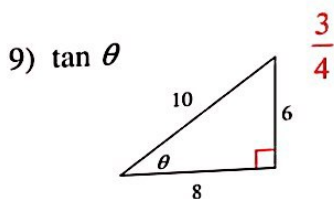
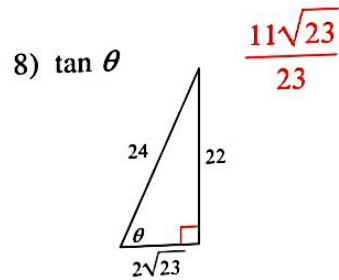
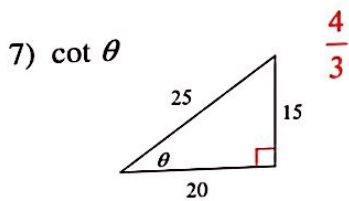
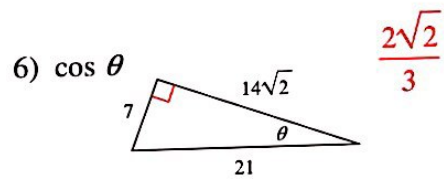
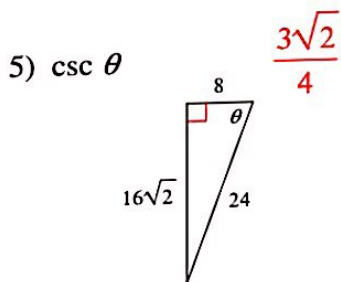
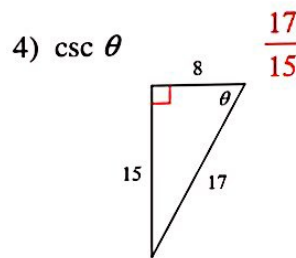
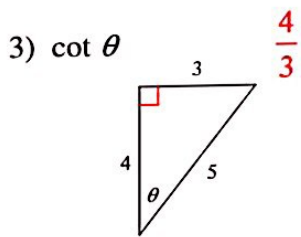
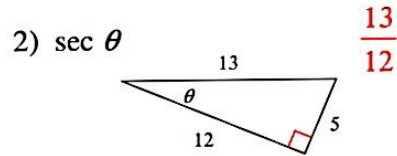
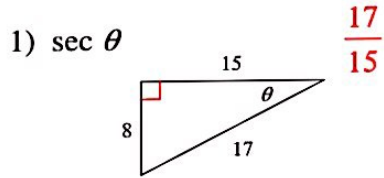
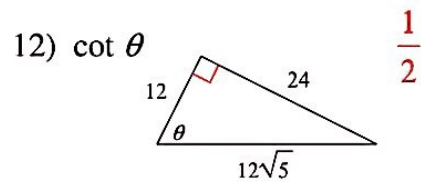
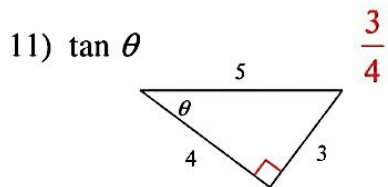


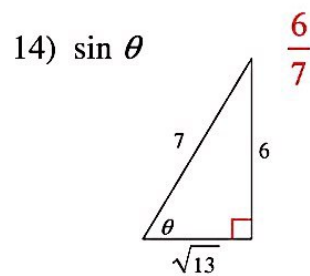
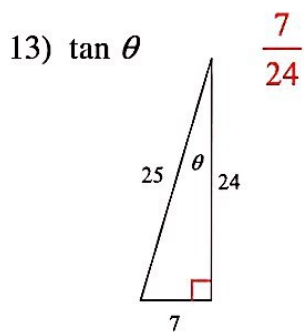
Right Triangle Trig. - Evaluating Trig. Ratios

Find the value of the trig function indicated.





-1-



Find the value of each. Round your answers to the nearest ten-thousandth.

15) $\cos 10^\circ$
0.9848

16) $\sin 60^\circ$
0.8660

17) $\csc 21^\circ$
2.7904

18) $\cos 60^\circ$
0.5000

19) $\tan 40^\circ$
0.8391

20) $\csc 59^\circ$
1.1666

21) $\csc 56^\circ$
1.2062

22) $\cot 65^\circ$
0.4663

23) $\tan 10^\circ$
0.1763

24) $\tan 25^\circ$
0.4663